











Addition


www.kto5education.com




   $\square + \square + \square = \square$




   $\square + \square + \square = \square$




   $\square + \square + \square = \square$

   $\square + \square + \square = \square$

   $\square + \square + \square = \square$

   $\square + \square + \square = \square$

   $\square + \square + \square = \square$

   $\square + \square + \square = \square$